




MENGENAL NOMBOR


Count up each group of minibeasts. Write the number in the box.

ENAM	
------	---

TUJUH	
-------	--

LAPAN	
-------	---

SEMBILAN	
----------	---

SEPULUH	
---------	---

MENGENAL NOMBOR

Count up each group of minibeasts. Write the number in the box.

SERBELAS	11
----------	-----------

DUA BELAS	12
-----------	-----------

TIGA BELAS	13
------------	-----------

EMPAT BELAS	14
-------------	-----------

LIMA BELAS	15
------------	-----------

MENGENAL NOMBOR

Count up each group of minibeasts. Write the number in the box.

ENAM BELAS

16

TUJUH BELAS

17

LAPAN BELAS

18

SEMBILAN BELAS

19

DUA PULUH

20