

MATEMATIK TAHAP AWAL 3

TEMA 4.2 -Tolak




NAMA : _____

Nama :


Tarikh:

Tolak

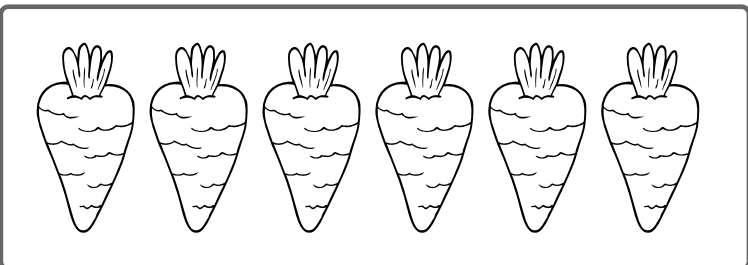
Tulis jawapan di dalam kotak yang disediakan.




$$5 - 2 =$$




$$7 - 4 =$$



$$6 - 1 =$$



$$9 - 3 =$$



$$3 - 3 =$$

Nama :

Tarikh:

Tolak

Tulis jawapan yang betul berdasarkan gambar yang diberikan.

$6 - 3 =$

$8 - 4 =$

$5 - 2 =$

$9 - 4 =$

$3 - 2 =$

$3 - 2 =$